

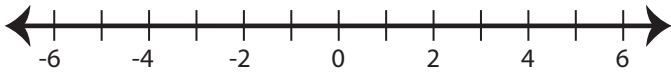
Name : \_\_\_\_\_

Score : \_\_\_\_\_

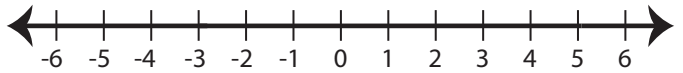
## Graphing Inequalities

Graph the inequality :

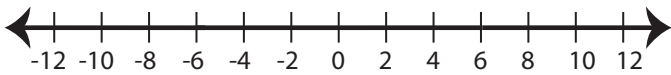
1)  $x \geq -2$



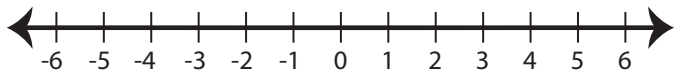
2)  $x < 5$



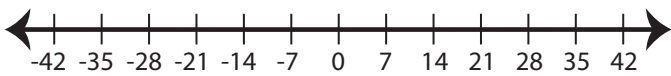
3)  $x \leq 6$



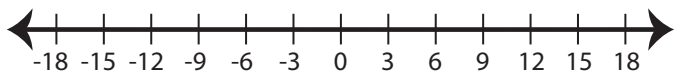
4)  $x > 1$



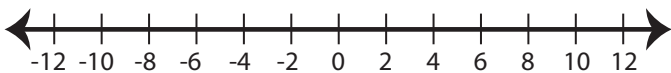
5)  $x < -14$



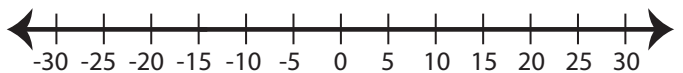
6)  $x \leq 9$



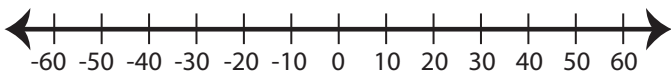
7)  $x > -2$



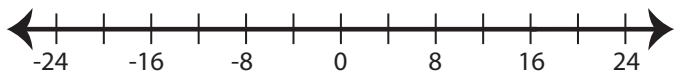
8)  $x \geq -15$



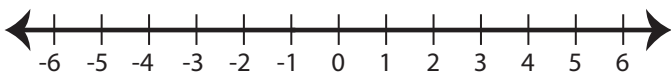
9)  $x \leq -10$



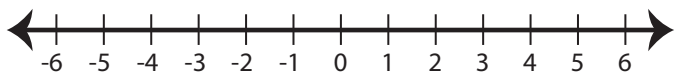
10)  $x > 16$



11)  $x > -1$



12)  $x \geq -3$



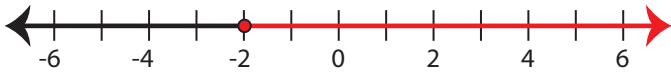
Name : \_\_\_\_\_

Score : \_\_\_\_\_

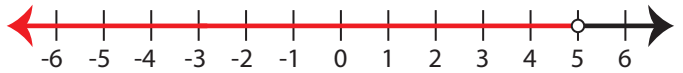
**Answer key**

Graph the inequality :

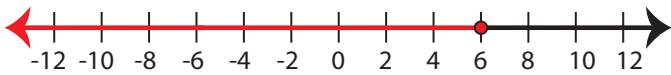
1)  $x \geq -2$



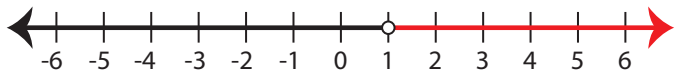
2)  $x < 5$



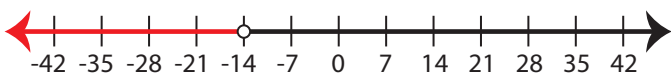
3)  $x \leq 6$



4)  $x > 1$



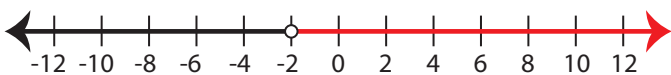
5)  $x < -14$



6)  $x \leq 9$



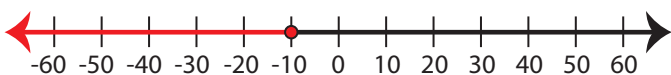
7)  $x > -2$



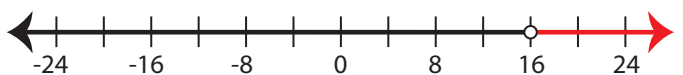
8)  $x \geq -15$



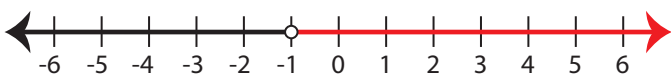
9)  $x \leq -10$



10)  $x > 16$



11)  $x > -1$



12)  $x \geq -3$

